



Anand Niketan

Maninagar Campus

Name : _____

Subject : Math

Date: _____

Grade : I Section : _____

Practice Worksheet-V

Roll No: _____

Dear Parent,
This circular is to let you know about the upcoming Periodic Test-I of **Math on -24/2/2020**

Syllabus:

Ch:3 Time

Ch:4 Money

Ch:5 Shapes And Patterns

Ch:6 Fractions

Ch:7 Data Handling (Activity)

Tables from 0 to 12

Subject Enrichment Activity:

First in Math (10M)

Mental Math (5M)

Math lab (5M)

Notebook (10M)

Dictation (10 M)

Dictation of Ch-6

Fractions will be

conducted on 30/1/2020

Mental Math of Ch-3 Time

and Ch-4 Money will be

conducted on 24/2/2020

Q.1 Fill in the blanks

- _____ means the day after today.
- The third day of the week is _____.
- June comes between _____ and _____.
- Indian money is in the form of _____.
- A _____ is a part of the whole.

Q.3 Count and write

1. $\boxed{100}$ $\bigcirc 5$ $\bigcirc 2$ $\boxed{50}$ $\bigcirc 10$ = _____

2. $\boxed{20}$ $\boxed{100}$ $\boxed{50}$ $\bigcirc 2$ $\bigcirc 1$ = _____

3. $\boxed{200}$ $\boxed{10}$ $\boxed{20}$ $\bigcirc 10$ = _____

4. $\bigcirc 10$ $\bigcirc 5$ $\bigcirc 2$ $\bigcirc 1$ $\bigcirc 5$ = _____

Q.2 Make different combinations using coins and notes for the given amount.


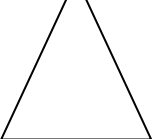

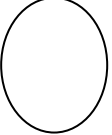




1. 12 –

2. 7 –

3. 8 –

4. 25 –

Q.4 Match the following

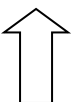
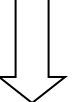


1.  
2.  
3.  
4.  

Q.5 How many rectangles are there in the given picture?




- a) 4 c) 6
b) 2 d) 3


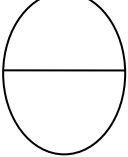
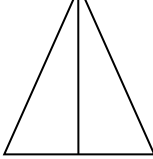
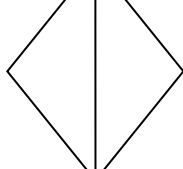
Q.6 What is the next shapes in the pattern?

1.     _____

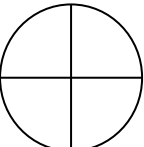
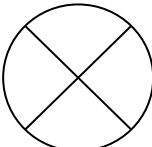
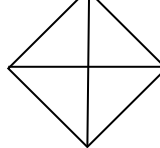
2.     _____

3.     _____

Q.7 Shade one- half of the following

1. 
2. 
3. 
4. 

Q.8 Shade one – fourth of the following

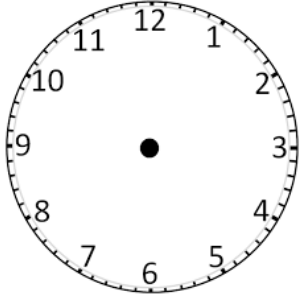
1. 
2. 
3. 

Q.9 Write the fraction for the shaded part

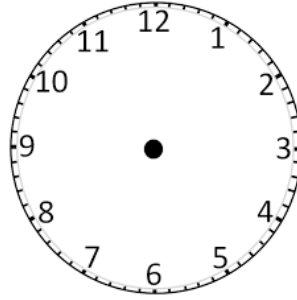
1.  

Q.10 Draw the hands according to the given time


1. 9:00





2. 12:00



Q.11 Write the time shown by the clock

1. 

2. 

3. 

Q.12 True or false

1. Triangle has 3 sides and 3 corners. _____
2. Cube, cuboid and cone are called solid shapes. _____
3. Four halves together make a whole. _____
4. The sun rises in the evening. _____

Q.13 Tables

1. $12 \times 6 =$ _____

2. $8 \times 9 =$ _____

3. $7 \times 7 =$ _____

4. $9 \times 5 =$ _____

5. $6 \times 3 =$ _____

6. $10 \times 10 =$ _____

7. $5 \times 3 =$ _____

8. $12 \times 9 =$ _____

9. $11 \times 4 =$ _____

Q.14 Shapes Explanation

1. _____

Sides: _____

Corners: _____



2. _____

Sides: _____

Corners: _____

